


R.G.T. Exercises Pre.1


pg.1

1) **Name** the following **scales** and all the **notes** in each one:


a) _____




b) _____



c) _____




d) _____




2) **TAB** the following **scales** and **name** all the **notes** in each one:


a) _____




b) _____



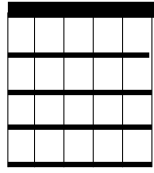
c) _____



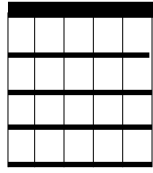
d) _____



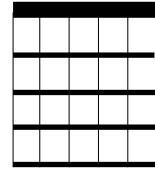
3) Name the following chords:




a) _____




b) _____




c) _____



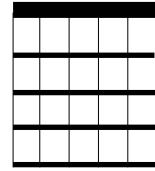
d) _____



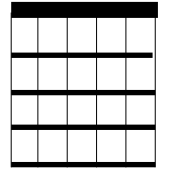
e) _____



f) _____



g) _____



h) _____

4) **Circle** the correct answer(s) for each question:

a) From thickest to thinnest the open strings are:

i) *E B G D A E* ii) *E A D G C E*

iii) *E A D G B E* iv) *E F G A B C*

b) Which of the following notes are **NOT** on the 3rd fret:

G A# F C D Ab

c) Which of these are **NOT** a part of the guitar:

fender nut neck elbow end pin threat

d) Which of the following notes sounds **highest**:

